

When a directrix is $x = -p$ and a focus is $(p, 0)$, find the equation for the tangent line having slope m to the parabola.[Geometric Approach]

준선이 $x = -p$ 이고 초점이 $(p, 0)$ 일 때,
포물선에서의 기울기가 m 인 접선의 방정식을
구하여라.[기하적 접근]

(When a directrix is $x = -p$ and a focus is $(p, 0)$, find the equation for the tangent line having slope m to the parabola.[Geometric Approach])

When a directrix is $x = -p$ and a focus is $(p, 0)$, find the equation for the tangent line having slope m to the parabola.[Geometric Approach]

▶ Start

▶ End

When a directrix is $x = -p$ and a focus is $(p, 0)$, find the equation for the tangent line having slope m to the parabola.[Geometric Approach]

▶ Start

▶ End


$$x = -p$$

When a directrix is $x = -p$ and a focus is $(p, 0)$, find the equation for the tangent line having slope m to the parabola.[Geometric Approach]

▶ Start

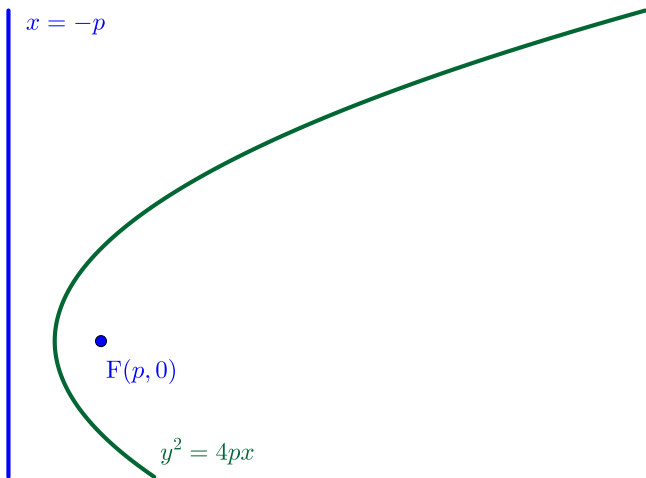
▶ End



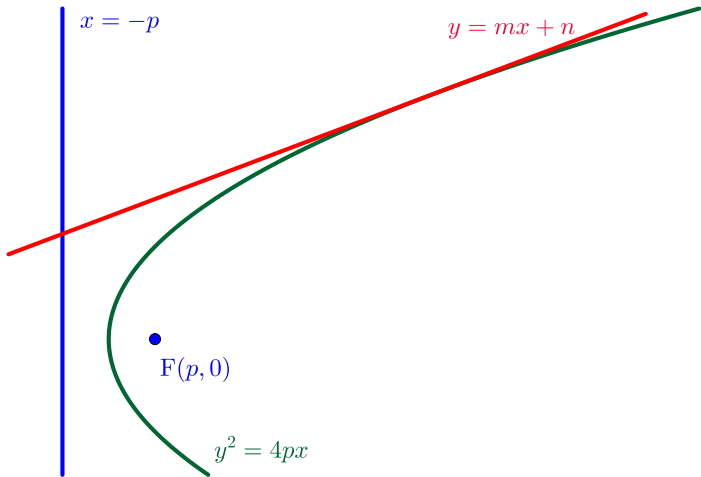
When a directrix is $x = -p$ and a focus is $(p, 0)$, find the equation for the tangent line having slope m to the parabola.[Geometric Approach]

▶ Start

▶ End



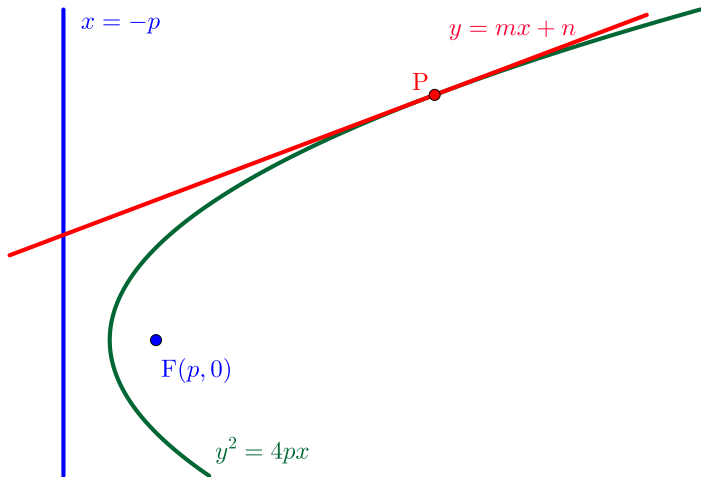
When a directrix is $x = -p$ and a focus is $(p, 0)$, find the equation for the tangent line having slope m to the parabola.[Geometric Approach]



When a directrix is $x = -p$ and a focus is $(p, 0)$, find the equation for the tangent line having slope m to the parabola.[Geometric Approach]

▶ Start

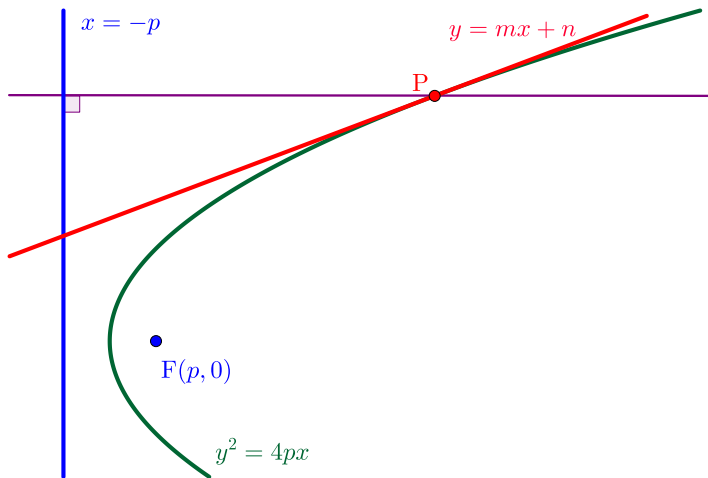
▶ End



When a directrix is $x = -p$ and a focus is $(p, 0)$, find the equation for the tangent line having slope m to the parabola.[Geometric Approach]

▶ Start

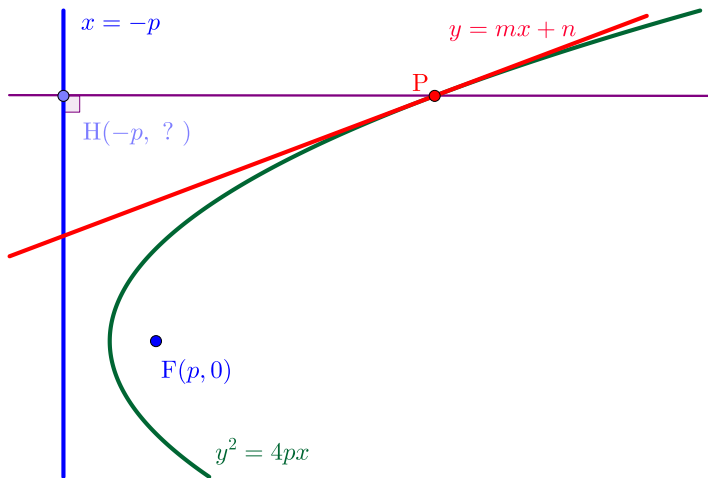
▶ End



When a directrix is $x = -p$ and a focus is $(p, 0)$, find the equation for the tangent line having slope m to the parabola.[Geometric Approach]

▶ Start

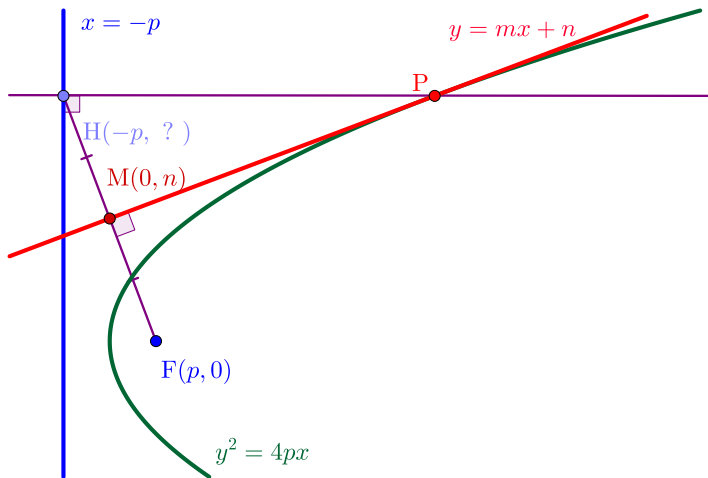
▶ End



When a directrix is $x = -p$ and a focus is $(p, 0)$, find the equation for the tangent line having slope m to the parabola.[Geometric Approach]

▶ Start

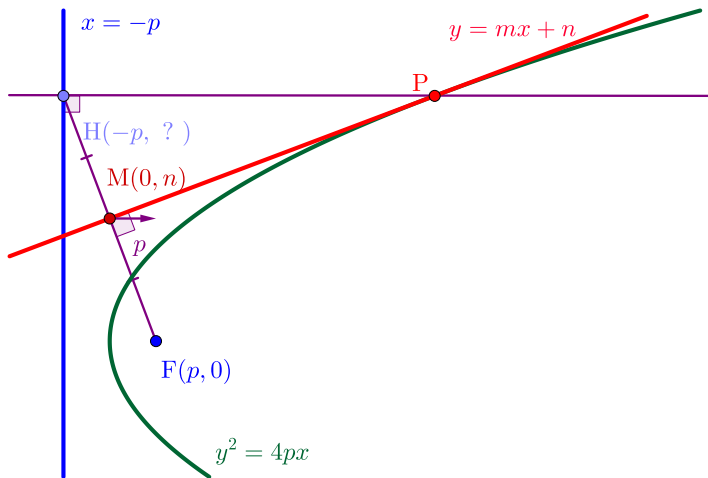
▶ End



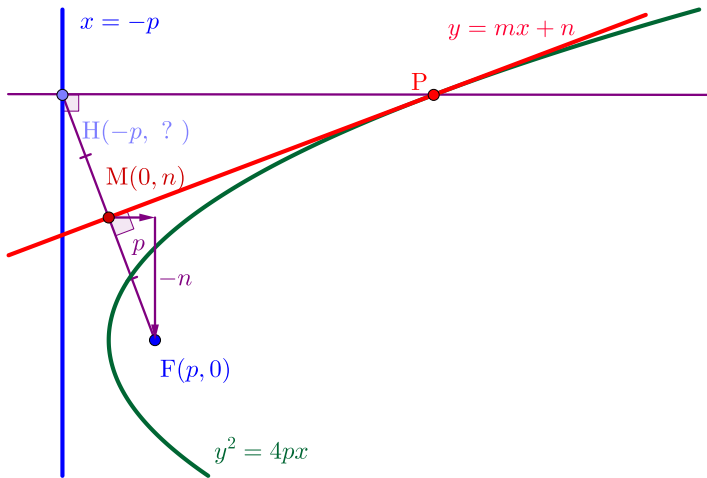
When a directrix is $x = -p$ and a focus is $(p, 0)$, find the equation for the tangent line having slope m to the parabola.[Geometric Approach]

▶ Start

▶ End



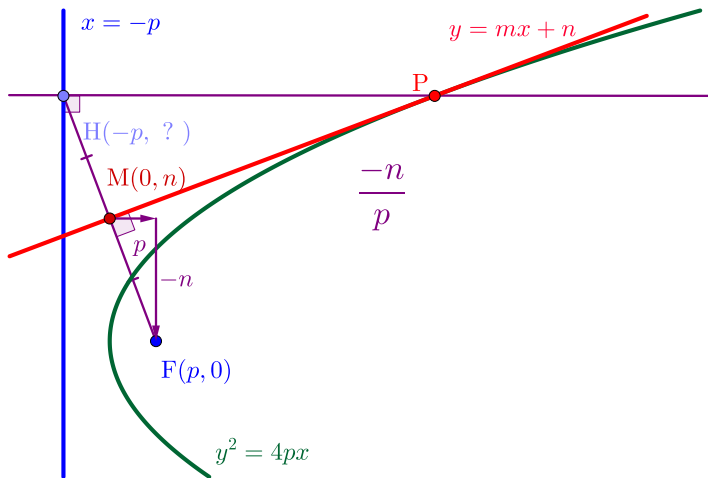
When a directrix is $x = -p$ and a focus is $(p, 0)$, find the equation for the tangent line having slope m to the parabola.[Geometric Approach]



When a directrix is $x = -p$ and a focus is $(p, 0)$, find the equation for the tangent line having slope m to the parabola.[Geometric Approach]

▶ Start

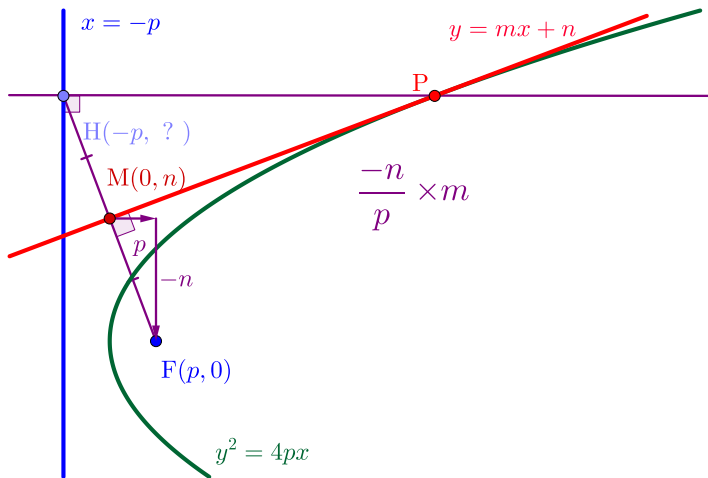
▶ End



When a directrix is $x = -p$ and a focus is $(p, 0)$, find the equation for the tangent line having slope m to the parabola.[Geometric Approach]

▶ Start

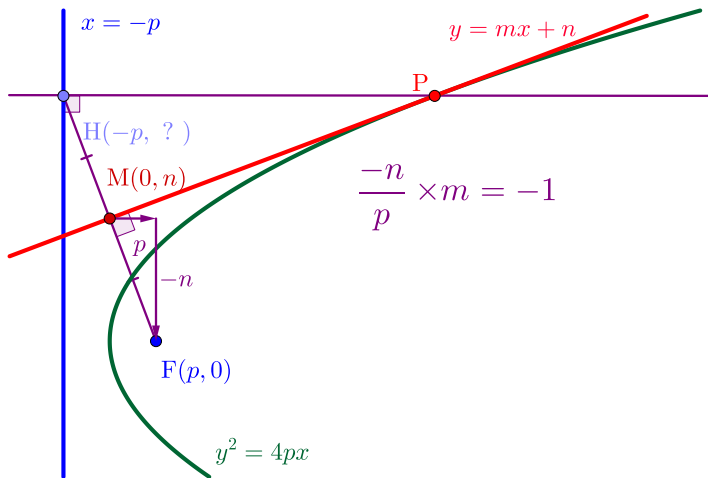
▶ End



When a directrix is $x = -p$ and a focus is $(p, 0)$, find the equation for the tangent line having slope m to the parabola.[Geometric Approach]

▶ Start

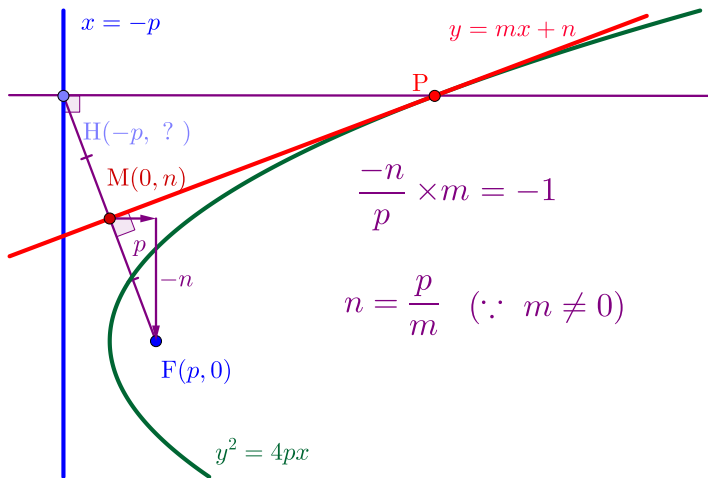
▶ End



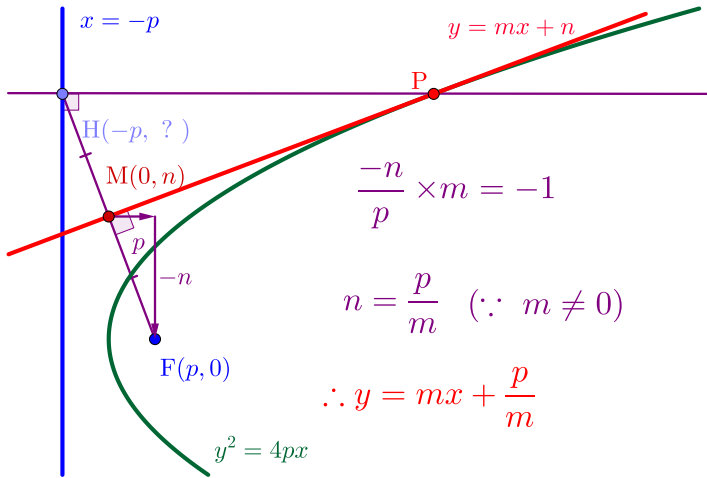
When a directrix is $x = -p$ and a focus is $(p, 0)$, find the equation for the tangent line having slope m to the parabola.[Geometric Approach]

▶ Start

▶ End



When a directrix is $x = -p$ and a focus is $(p, 0)$, find the equation for the tangent line having slope m to the parabola.[Geometric Approach]



When a directrix is $x = -p$ and a focus is $(p, 0)$, find the equation for the tangent line having slope m to the parabola.[Geometric Approach]

Github:

<https://min7014.github.io/math20220326001.html>

Click or paste URL into the URL search bar,
and you can see a picture moving.