


An angle between a chord and a tangent is equal to any angle in the alternate segment.(when the angle of the chord and the tangent is an acute angle)

원의 접선과 그 접점을 지나는 현이 이루는
각의 크기는 그 각의 내부에 있는 호에
대한 원주각의 크기와 같다.(현과 접선의
각이 예각일때)

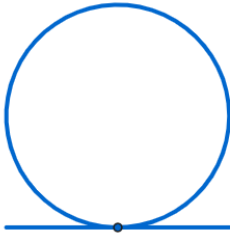
(An angle between a chord and a tangent is equal to any angle in the
alternate segment.(when the angle of the chord and the tangent is an
acute angle))

An angle between a chord and a tangent is equal to any angle in the alternate segment.(when the angle of the chord and the tangent is an acute angle)

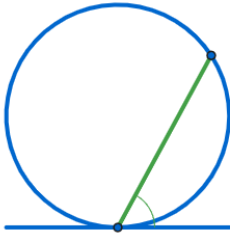
An angle between a chord and a tangent is equal to any angle in the alternate segment.(when the angle of the chord and the tangent is an acute angle)



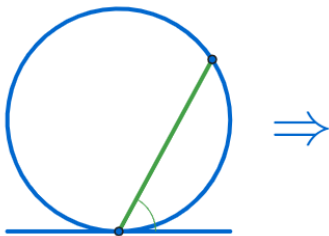
An angle between a chord and a tangent is equal to any angle in the alternate segment.(when the angle of the chord and the tangent is an acute angle)



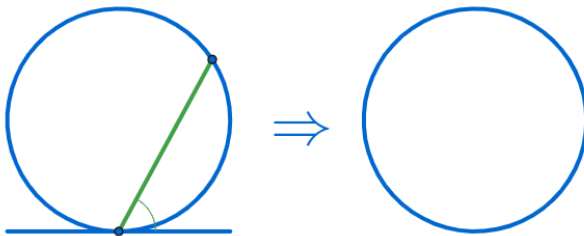
An angle between a chord and a tangent is equal to any angle in the alternate segment.(when the angle of the chord and the tangent is an acute angle)



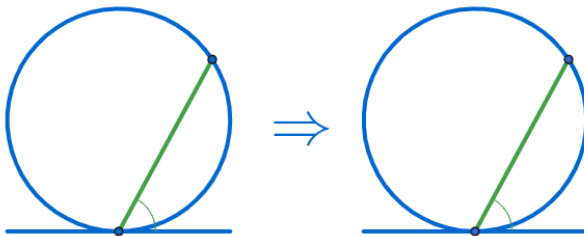
An angle between a chord and a tangent is equal to any angle in the alternate segment.(when the angle of the chord and the tangent is an acute angle)



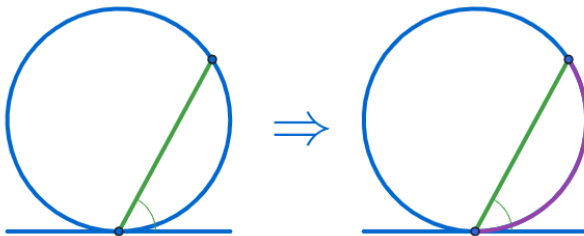
An angle between a chord and a tangent is equal to any angle in the alternate segment.(when the angle of the chord and the tangent is an acute angle)



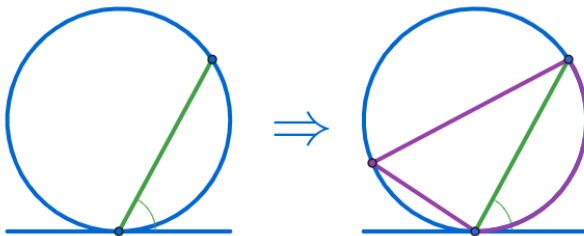
An angle between a chord and a tangent is equal to any angle in the alternate segment.(when the angle of the chord and the tangent is an acute angle)



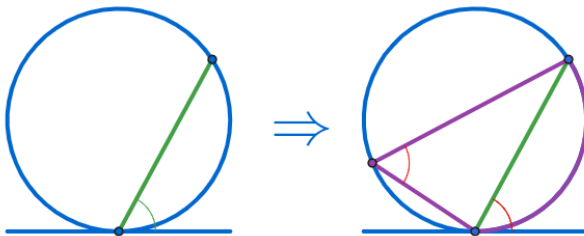
An angle between a chord and a tangent is equal to any angle in the alternate segment.(when the angle of the chord and the tangent is an acute angle)



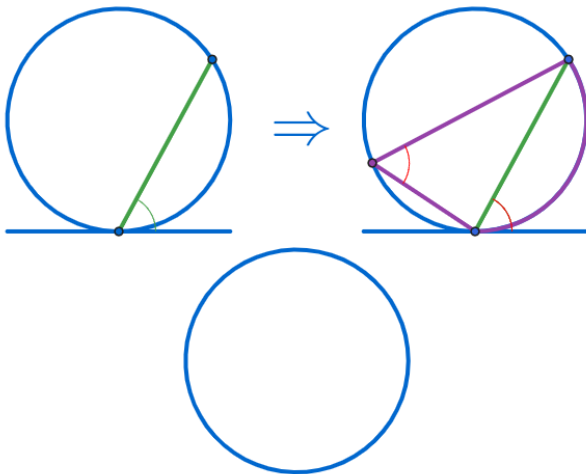
An angle between a chord and a tangent is equal to any angle in the alternate segment.(when the angle of the chord and the tangent is an acute angle)



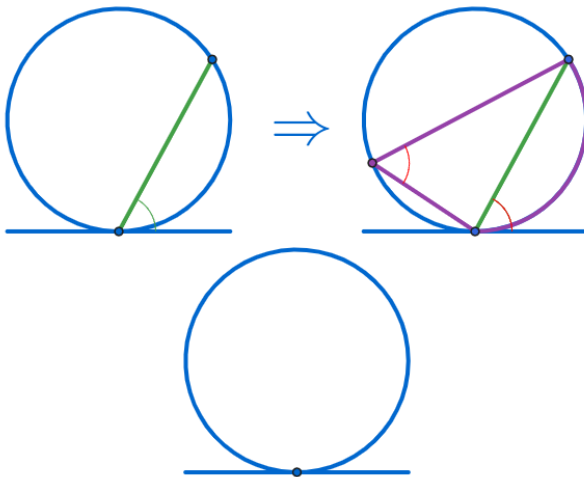
An angle between a chord and a tangent is equal to any angle in the alternate segment.(when the angle of the chord and the tangent is an acute angle)



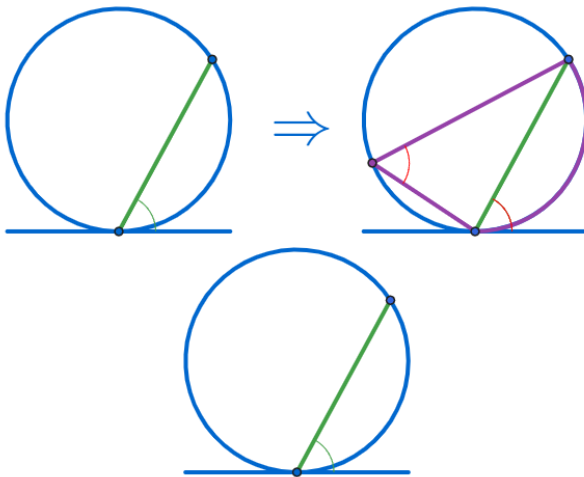
An angle between a chord and a tangent is equal to any angle in the alternate segment.(when the angle of the chord and the tangent is an acute angle)



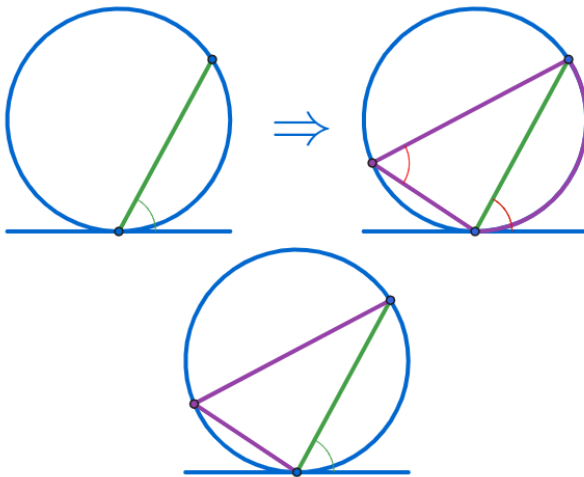
An angle between a chord and a tangent is equal to any angle in the alternate segment.(when the angle of the chord and the tangent is an acute angle)



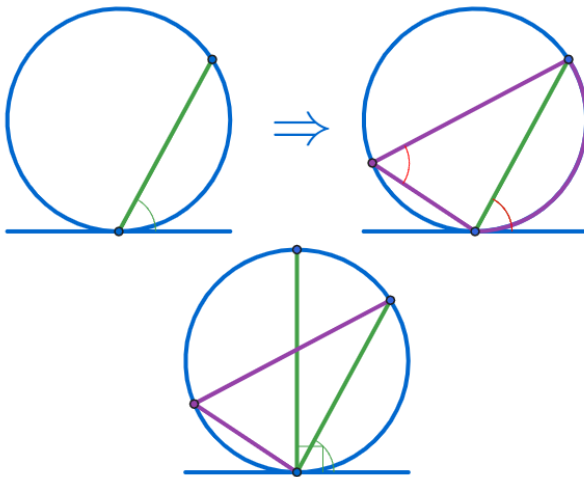
An angle between a chord and a tangent is equal to any angle in the alternate segment.(when the angle of the chord and the tangent is an acute angle)



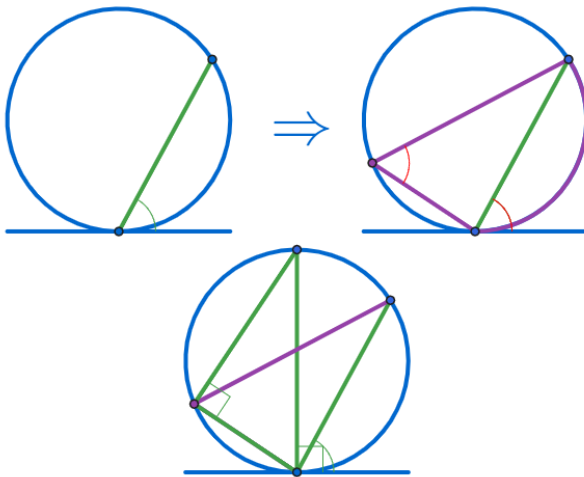
An angle between a chord and a tangent is equal to any angle in the alternate segment.(when the angle of the chord and the tangent is an acute angle)



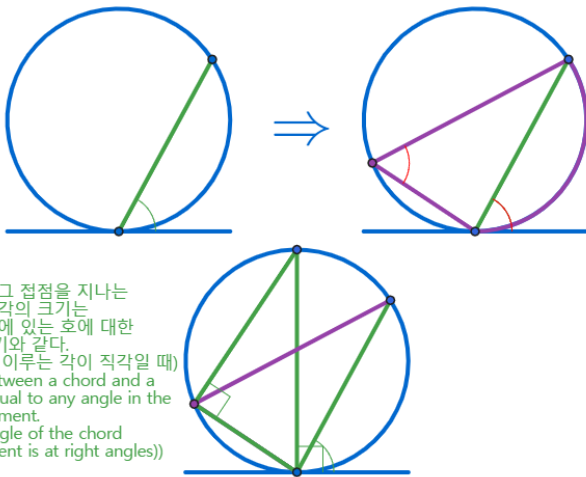
An angle between a chord and a tangent is equal to any angle in the alternate segment.(when the angle of the chord and the tangent is an acute angle)



An angle between a chord and a tangent is equal to any angle in the alternate segment.(when the angle of the chord and the tangent is an acute angle)

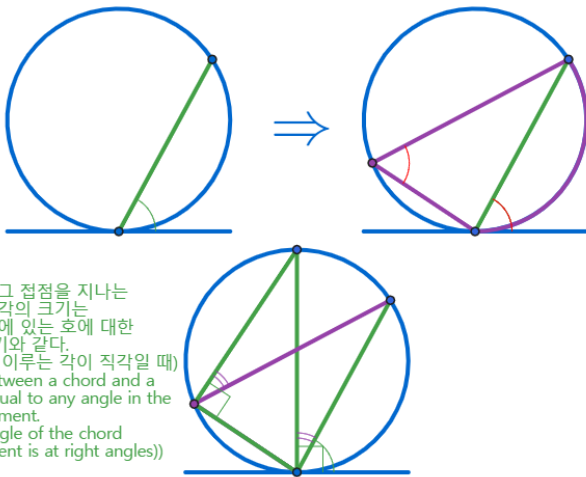


An angle between a chord and a tangent is equal to any angle in the alternate segment.(when the angle of the chord and the tangent is an acute angle)



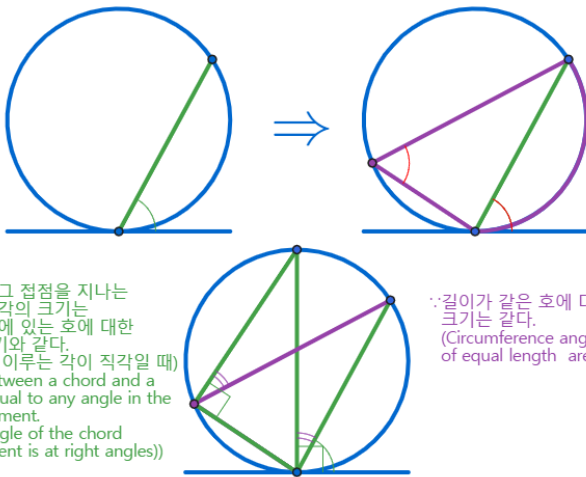
∴원의 접선과 그 접점을 지나는
현이 이루는 각의 크기는
그 각의 내부에 있는 호에 대한
원주각의 크기와 같다.
(현과 접선이 이루는 각이 직각일 때)
(An angle between a chord and a
tangent is equal to any angle in the
alternate segment.
(when the angle of the chord
and the tangent is at right angles))

An angle between a chord and a tangent is equal to any angle in the alternate segment.(when the angle of the chord and the tangent is an acute angle)



∴원의 접선과 그 접점을 지나는
현이 이루는 각의 크기는
그 각의 내부에 있는 호에 대한
원주각의 크기와 같다.
(현과 접선이 이루는 각이 직각일 때)
(An angle between a chord and a
tangent is equal to any angle in the
alternate segment.
(when the angle of the chord
and the tangent is at right angles))

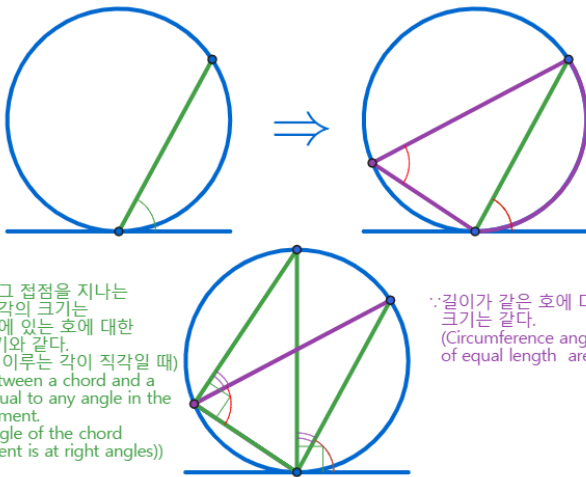
An angle between a chord and a tangent is equal to any angle in the alternate segment.(when the angle of the chord and the tangent is an acute angle)



∴원의 접선과 그 접점을 지나는
현이 이루는 각의 크기는
그 각의 내부에 있는 호에 대한
원주각의 크기와 같다.
(현과 접선이 이루는 각이 직각일 때)
(An angle between a chord and a
tangent is equal to any angle in the
alternate segment.
(when the angle of the chord
and the tangent is at right angles))

∴길이가 같은 호에 대한 원주각의
크기는 같다.
(Circumference angles of arcs
of equal length are the same size.)

An angle between a chord and a tangent is equal to any angle in the alternate segment.(when the angle of the chord and the tangent is an acute angle)



∴원의 접선과 그 접점을 지나는
현이 이루는 각의 크기는
그 각의 내부에 있는 호에 대한
원주각의 크기와 같다.
(현과 접선이 이루는 각이 직각일 때)
(An angle between a chord and a
tangent is equal to any angle in the
alternate segment.
(when the angle of the chord
and the tangent is at right angles))

∴길이가 같은 호에 대한 원주각의
크기는 같다.
(Circumference angles of arcs
of equal length are the same size.)

An angle between a chord and a tangent is equal to any angle in the alternate segment.(when the angle of the chord and the tangent is an acute angle)

Github:

<https://min7014.github.io/math20200216001.html>

Click or paste URL into the URL search bar, and you can see a picture moving.