

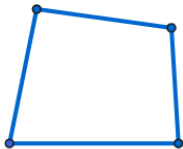
If the sum of the opposite angles of a pair of tetragon is 180 degrees, it is inscribed in a circle.

사각형의 한 쌍의 대각의 크기의 합이 180도 이면 원에 내접한다.

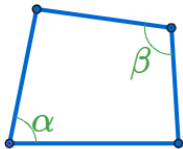
(If the sum of the opposite angles of a pair of tetragon is 180 degrees, it is inscribed in a circle.)

If the sum of the opposite angles of a pair of tetragon is 180 degrees, it is inscribed in a circle.

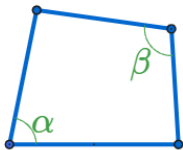
If the sum of the opposite angles of a pair of tetragon is 180 degrees, it is inscribed in a circle.



If the sum of the opposite angles of a pair of tetragon is 180 degrees, it is inscribed in a circle.

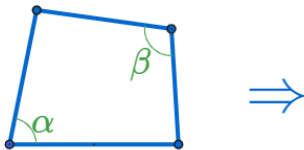


If the sum of the opposite angles of a pair of tetragon is 180 degrees, it is inscribed in a circle.



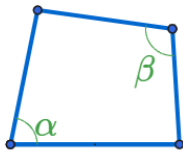
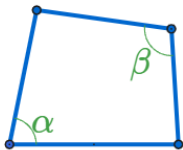
$$\angle\alpha + \angle\beta = 180^\circ$$

If the sum of the opposite angles of a pair of tetragon is 180 degrees, it is inscribed in a circle.



$$\angle\alpha + \angle\beta = 180^\circ$$

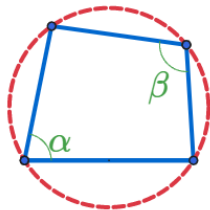
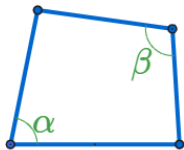
If the sum of the opposite angles of a pair of tetragon is 180 degrees, it is inscribed in a circle.



$$\angle\alpha + \angle\beta = 180^\circ$$

$$\angle\alpha + \angle\beta = 180^\circ$$

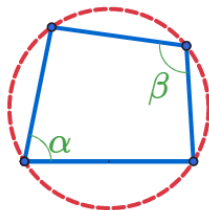
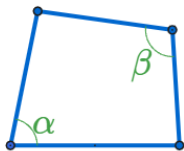
If the sum of the opposite angles of a pair of tetragon is 180 degrees, it is inscribed in a circle.



$$\angle\alpha + \angle\beta = 180^\circ$$

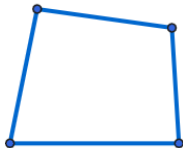
$$\angle\alpha + \angle\beta = 180^\circ$$

If the sum of the opposite angles of a pair of tetragon is 180 degrees, it is inscribed in a circle.

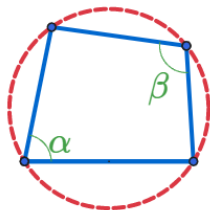
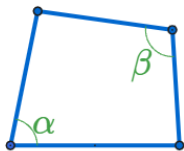


$$\angle\alpha + \angle\beta = 180^\circ$$

$$\angle\alpha + \angle\beta = 180^\circ$$

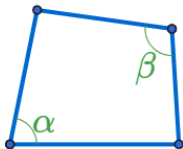


If the sum of the opposite angles of a pair of tetragon is 180 degrees, it is inscribed in a circle.

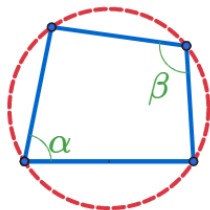
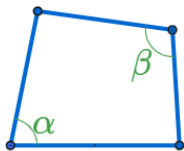


$$\angle\alpha + \angle\beta = 180^\circ$$

$$\angle\alpha + \angle\beta = 180^\circ$$

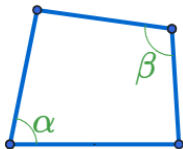


If the sum of the opposite angles of a pair of tetragon is 180 degrees, it is inscribed in a circle.



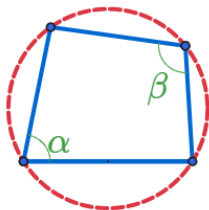
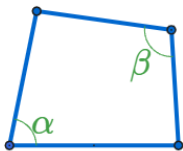
$$\angle\alpha + \angle\beta = 180^\circ$$

$$\angle\alpha + \angle\beta = 180^\circ$$



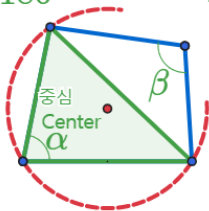
$$\angle\alpha + \angle\beta = 180^\circ$$

If the sum of the opposite angles of a pair of tetragon is 180 degrees, it is inscribed in a circle.



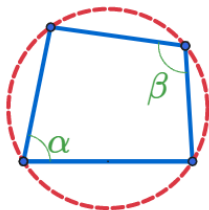
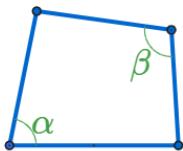
$$\angle\alpha + \angle\beta = 180^\circ$$

$$\angle\alpha + \angle\beta = 180^\circ$$



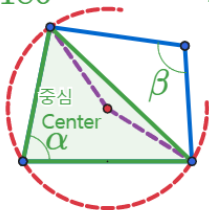
$$\angle\alpha + \angle\beta = 180^\circ$$

If the sum of the opposite angles of a pair of tetragon is 180 degrees, it is inscribed in a circle.



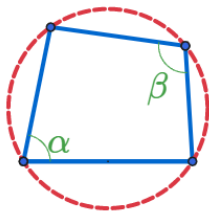
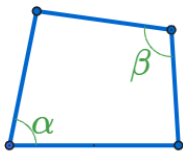
$$\angle\alpha + \angle\beta = 180^\circ$$

$$\angle\alpha + \angle\beta = 180^\circ$$



$$\angle\alpha + \angle\beta = 180^\circ$$

If the sum of the opposite angles of a pair of tetragon is 180 degrees, it is inscribed in a circle.



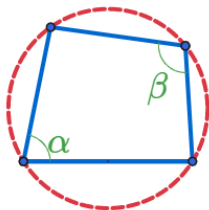
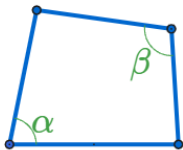
$$\angle\alpha + \angle\beta = 180^\circ$$

$$\angle\alpha + \angle\beta = 180^\circ$$



$$\angle\alpha + \angle\beta = 180^\circ$$

If the sum of the opposite angles of a pair of tetragon is 180 degrees, it is inscribed in a circle.



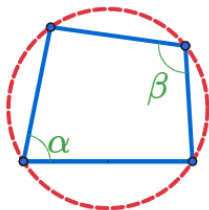
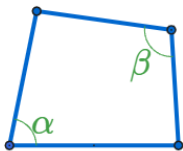
$$\angle\alpha + \angle\beta = 180^\circ$$

$$\angle\alpha + \angle\beta = 180^\circ$$



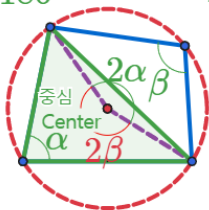
$$\angle\alpha + \angle\beta = 180^\circ$$

If the sum of the opposite angles of a pair of tetragon is 180 degrees, it is inscribed in a circle.



$$\angle\alpha + \angle\beta = 180^\circ$$

$$\angle\alpha + \angle\beta = 180^\circ$$



$$\angle\alpha + \angle\beta = 180^\circ$$

If the sum of the opposite angles of a pair of tetragon is 180 degrees, it is inscribed in a circle.

Github:

<https://min7014.github.io/math20200213001.html>

Click or paste URL into the URL search bar, and you can see a picture moving.